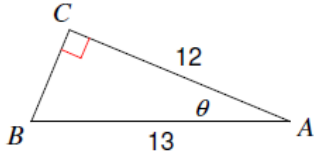


Name \_\_\_\_\_

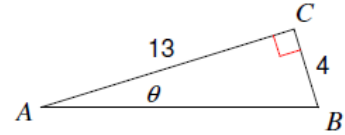
Date \_\_\_\_\_ Period \_\_\_\_\_

**Find the measure of each angle indicated. Round to the nearest tenth.**

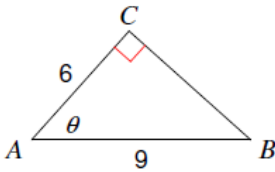
1)



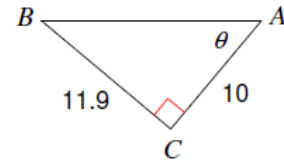
2)



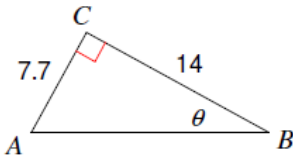
3)



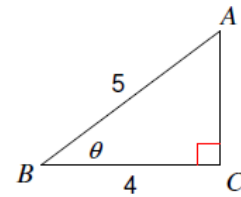
4)



5)

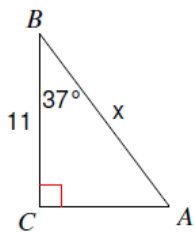


6)

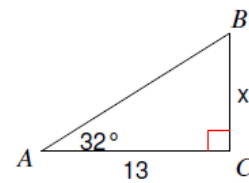


**Find the measure of each side indicated. Round to the nearest tenth.**

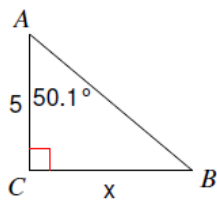
9)



10)



11)



12)

